

Name _____

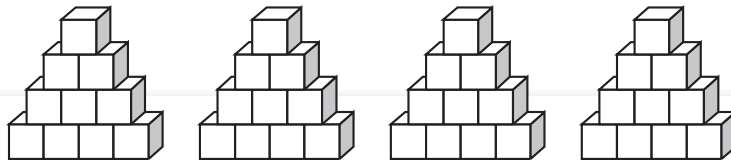
Equal Groups of 10

Essential Question: How can you find the total number in equal groups of 10?

Model and Draw

There are 4 packs of juice. Each pack has 10 juice boxes. How many juice boxes are there in all?

Make 4 groups of 10 cubes.



4 groups of 10 is 40 in all.

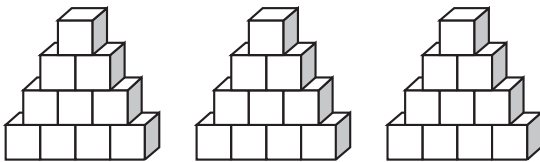
I can count the equal groups by tens—10, 20, 30, 40—to find how many in all.

Share and Show



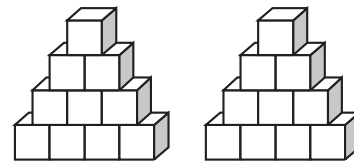
Complete the sentence to show how many in all.

1.



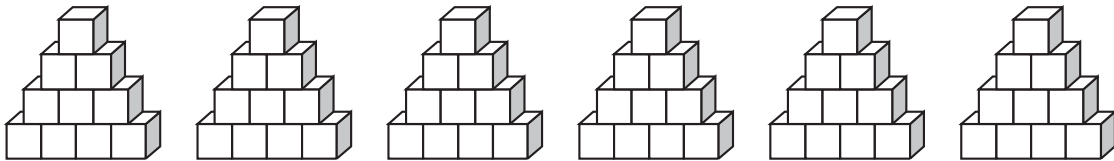
_____ groups of _____ is _____ in all.

2.



_____ groups of _____ is _____ in all.

3.



_____ groups of _____ is _____ in all.



Math Talk How many groups of ten are in 70? Explain.