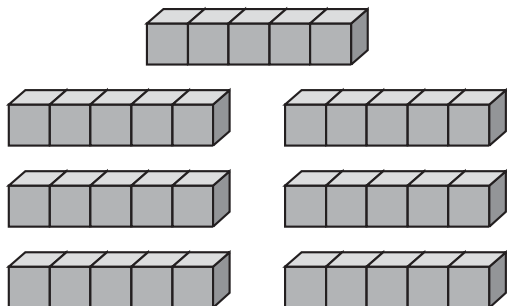


On Your Own

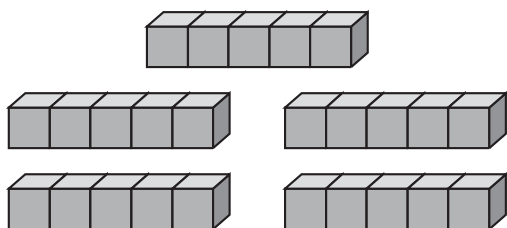
Complete the sentences to show how many in all.

4.



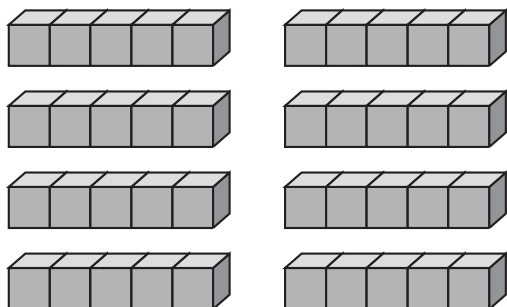
___ groups of ___ is ___ in all.

5.



___ groups of ___ is ___ in all.

6.



___ groups of ___ is ___ in all.

PROBLEM SOLVING



Solve. Write or draw to explain.

7. Gina fills 6 pages of her photo album. She puts 5 photos on each page. How many photos does Gina put in her album?

___ photos



TAKE HOME ACTIVITY • Place your hands next to your child's hands. Ask how many groups of 5 fingers. Have your child tell you how to find how many in all. How many fingers in all?

P278 two hundred seventy-eight