

Name _____

Equal Groups of 5

Essential Question: How can you find the total number in equal groups of 5?

Model and Draw

Luke made 3 cube trains.
He connected 5 cubes in
each train. How many cubes
did he use in all?



Make 3 groups of 5 cubes.

I can count the
equal groups by
fives—5, 10, 15—to
find how many
in all.

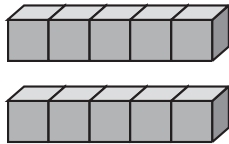
3 groups of 5 is 15 in all.

Share and Show



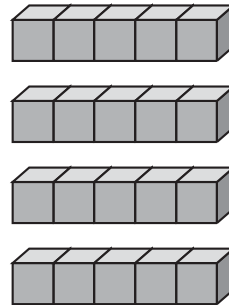
Complete the sentence to show how many in all.

1.



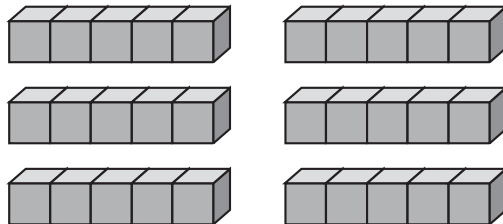
_____ groups of _____ is _____ in all.

2.



_____ groups of _____ is _____ in all.

3.



_____ groups of _____ is _____ in all.



Math Talk How can you use addition to find how many in all in Exercise 2?