



On Your Own


Complete the sentence to show how many in all.



_____ groups of _____ is _____ in all.



_____ groups of _____ is _____ in all.



_____ groups of _____ is _____ in all.



_____ groups of _____ is _____ in all.

PROBLEM SOLVING REAL WORLD

Solve. Write or draw to explain.

8. Coach Baker keeps 2 basketballs in each bin. There are 5 bins. How many basketballs are stored in the bins?

_____ basketballs



TAKE HOME ACTIVITY • Have your child draw groups of two Xs and tell you how to find how many there are in all.