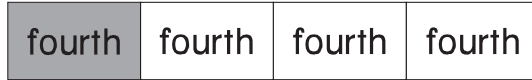


Name _____

Compare Fraction Models

Essential Question How can you use fraction models to make comparisons?

Model and Draw

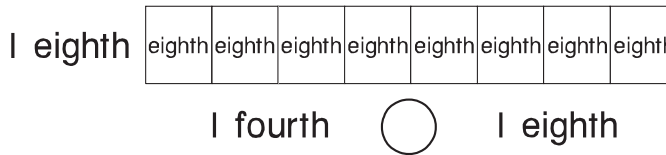
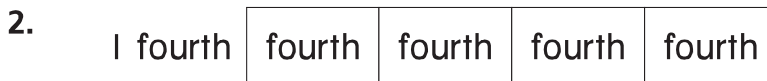
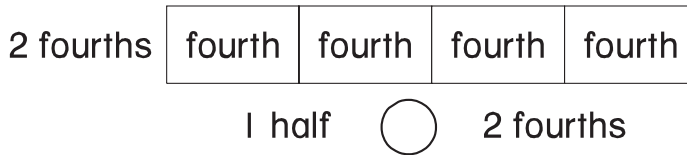


1 fourth < 1 half

Share and Show



Color to show the fractions. Write $<$, $=$, or $>$.



© Houghton Mifflin Harcourt Publishing Company



Math Talk Look at the strips above. Is 1 half greater than or less than 3 fourths? How do you know?