




Name _____

Fraction Models: Fourths and Eighths**Essential Question** How can you identify **fourths** and **eighths**?**Model and Draw** 4 equal parts or 4 fourths 8 equal parts or 8 eighths 1 part of 4 equal parts or 1 fourth 1 part of 8 equal parts or 1 eighth**Share and Show**

Color the strips. Show two different ways to show 1 fourth.



Color the strips. Show two different ways to show 1 eighth.

**Math Talk** How are 4 fourths and 8 eighths alike?