




Name _____

Fraction Models: Thirds and Sixths**Essential Question** How can you identify thirds and sixths?**Model and Draw** 3 equal parts or 3 thirds 6 equal parts or 6 sixths 1 part of 3 equal parts or
 1 third 1 part of 6 equal parts or
 1 sixth**Share and Show**Color the strips. Show two different ways to show $\frac{1}{3}$.Color the strips. Show two different ways to show $\frac{1}{6}$.**Math Talk** How are 3 thirds and 6 sixths alike?