

Name _____


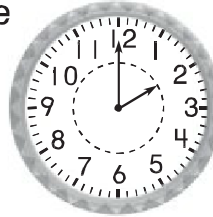
Elapsed Time in Hours

Essential Question How do you find the number of hours between two times?

Model and Draw

Baseball practice starts at 2:00. Everyone leaves practice at 4:00. How long does baseball practice last?

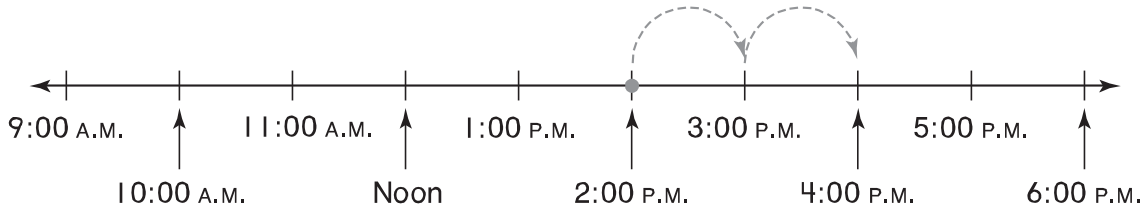
Use the time line to count how many hours passed from 2:00 P.M. to 4:00 P.M.



_____ hours

Starts at 2:00

Ends at 4:00



Share and Show



Use the time line above. Solve.

1. The game starts at 3:00 P.M. It ends at 6:00 P.M. How long does the game last?

_____ hours

2. The plane leaves at 10:00 A.M. It arrives at 2:00 P.M. How long is the plane trip?

_____ hours

3. Max goes out at 2:00 P.M. He comes back in at 5:00 P.M. For how long was Max out?

_____ hours

4. Art class starts at 9:00 A.M. It ends at 11:00 A.M. How long is the art class?

_____ hours



Math Talk

Exercise 2.

Describe how you used the time line for