

Name \_\_\_\_\_


## Hour Before and Hour After

**Essential Question:** How do you tell the time 1 hour before and 1 hour after a given time?

### Model and Draw

For these times, the minute hand points to the same place. The hour hands point to different numbers.

The time is 8:00.




The hour hand points to 8.

1 hour before

7:00


The hour hand points to 7.



1 hour after

9:00

The hour hand points to 9.



### Share and Show



Write the time shown on the clock. Then write the time 1 hour before and 1 hour after.

1.



\_\_\_\_\_   
 1 hour before   
 \_\_\_\_\_   
 1 hour after

2.



\_\_\_\_\_   
 1 hour before   
 \_\_\_\_\_   
 1 hour after

© Houghton Mifflin Harcourt Publishing Company



**Math Talk** How are the hands on a clock that shows 8 o'clock the same as the hands on a clock 1 hour after? How are they different?